

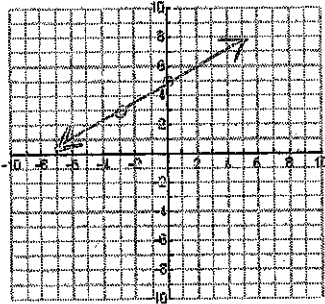
Slope - Day II HW

8.3 HW

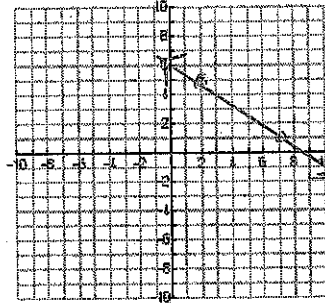
Name _____

Find the slope of the following lines:

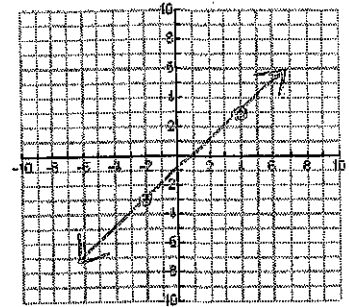
1.



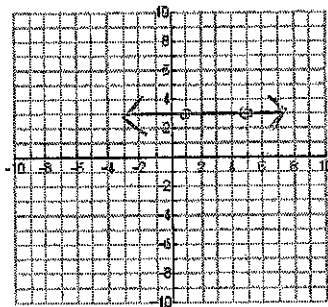
2.



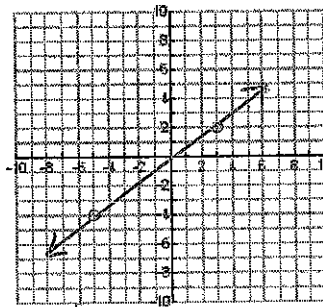
3.



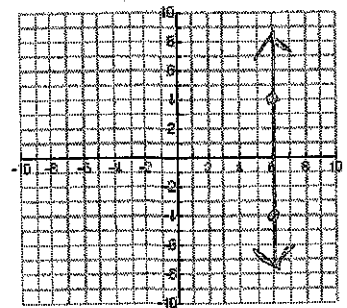
4.



5.



6.



Find the slope of the line through the given points.

7. $(8, 4), (6, 5)$

8. $(-4, 2), (-6, 5)$

9. $(-6, 3), (-4, 5)$

10. $(0, 7), (2, 3)$

11. $(-5, 3), (6, 5)$

12. $(6, 3), (2, 0)$